

ADARSH WORLD SCHOOL

DWARKA, SECTOR-12

SUMMER HOLIDAY HOMEWORK

CLASS III



Grade III

Summer Fun Activities

Note
for
Parents

हिन्दी

आदरणीय अभिभावक गण,

नमस्ते !

ग्रीष्म ऋतु आरम्भ हो गयी है !

इस समय प्रयास किया जाना चाहिए जितना भी हो सके समय साथ बिताया जाए । यह समय बच्चों को उनकी जानकारी, कलाकारी तथा कल्पना को उड़ान देने का है । इस समय अभिभावकों का भूमिका बच्चों को उन्नति के पथ पर अग्रसर करने की तथा उन्हें आवश्यक सुविधाएँ देने की है।

छात्रों का मूल तथा वास्तविक कार्यों के कारण वे न केवल प्रशंसा के पात्र बनेंगे बल्कि अपनी अलग पहचान बनाने में सक्षम होंगे ।

अपने बच्चे को शिक्षा में सहयोग देने के लिए ग्रीष्मावकाश में दी गयी प्रतियों का आनंद लेने दें साथ ही उनके विचारों को सुदृढ़ करने का प्रयास करें । जिसकी सहायता से छात्रा अपने रचनात्मक लेखन में सुधार करेंगे तथा विद्यालय में किए कार्य की पुनरावृत्ति भी कर पाएँगे । अतः प्रयास करें कि बच्चे अपना कार्य आपके निरीक्षण में स्वयं करें। आपके ग्रीष्मावकाश मंगलमय हों !

Have a nice and
**Happy Summer
Vacation!**



असाइनमेंट -1

पाठ-1,2,3 की पुनरावृत्ति कररण ।

असाइनमेंट -2

- स्वतंत्रता दिवस पर अनुच्छेद लिखिए। (A4 साइज़ शीट)
- नीचे दी गई कार्य पत्रिकाओं को पूरा करिये ।

सही विलोम शब्द चुनिए :

रात	गंदा	नीचे	उधर	ठंडा
पतला	छोटा	रोना	बूरा	बाहर

अंदर -

ऊपर -

गरम -

दिन -

मोटा -

इधर -

साफ़ -

अच्छा -

बड़ा -

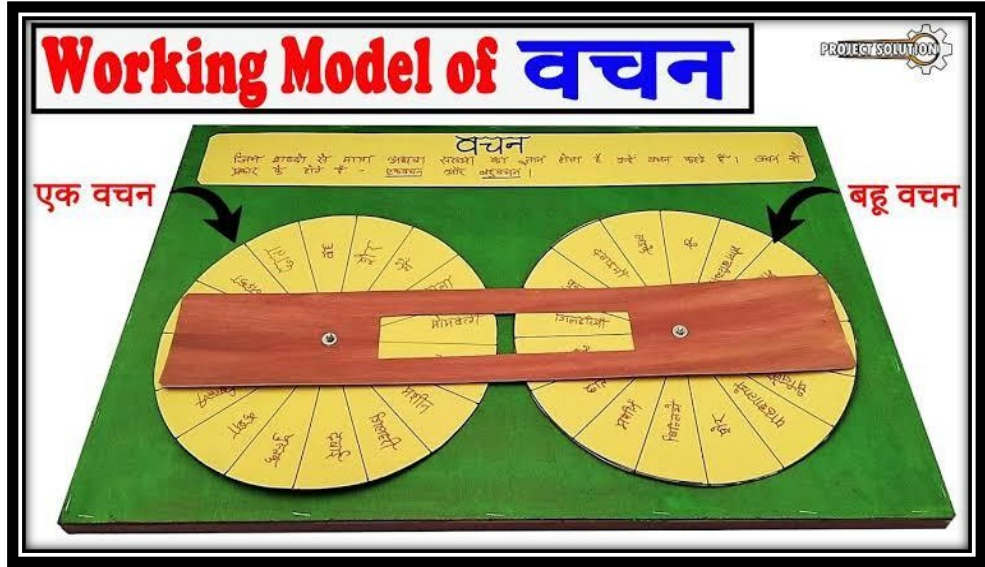
हँसना -

असाइनमेंट -3

➤ नीचे दिए गए विषयों पर मॉडल बनाइए।

- वचन व्हील (Roll no. 1-20)

(मॉडल बनाने के लिए बच्चे कार्डबोर्ड, पेपर आदि का इस्तेमाल कर सकते हैं)



- लिंग मॉडल (A3 साइज़ शीट) (Roll no. 21-40)
(नीचे दी गई तस्वीरों से मदद ले सकते हैं।
)



लिंग






ENGLISH

- Do one page cursive writing daily.
- Reading stories enhance the language and vocabulary. Read the following stories :-
 - Snow white and the seven Dwarfs
 - The Pied Piper of Hamelin
 - Alice in Wonderland
 - Little Red Riding Hood


ACTIVITY :-

- For roll no. 1 to 20
Read the above mentioned stories. Design a beautiful and creative book cover for a story that you enjoyed reading.



➤ For roll no. 21 to 40

Read the above mentioned stories. Design and make a beautiful and



creative bookmark based on the story that you enjoyed reading.

- Learn the syllabus done in notebook and books thoroughly.
- Do the following given worksheets.

ASSIGNMENT READING

Read the passage and answer the questions.

All the children in the colony are happy. They are getting a new playground.

There is a tall ladder and a slide to slide down. Under the slide, is a tunnel to crawl through.

There is also a swinging bridge to go across from one side to another. There are monkey bars for children. There are four swings. It takes the children high up in the air and two see- saws.

There are so many things to do in this new playground. All the children are happy that they are getting a new playground.

I Answer these questions.

Q1. How many swings are there in the park?

Q2. Why are the children in the colony happy?

II Write the opposite of the following words from the given passage.

1. up - _____

2. short - _____

III Complete the given sentences.

1. There is a tall _____.

2. All the children are _____.

WRITING

Complete the story with the given options.

[promised , naughty , woollen , asleep , cry]

Sheba was a _____ little kitten belonging to Mrs.Dawan .One afternoon, when Mrs.Dawan was knitting a woollen scarf, she fell _____. “What a nice ball!” said Sheba when she saw the _____ ball. She took a wool in her mouth and started jumping around in the room. Soon she got caught in the wool. She tried to get free but could not. So she began to _____. Mrs. Dawan was awakened by her cries. She gave Sheba an angry look but also freed her. Sheba _____ never to be naughty again.

Picture comprehension

Write three sentences based on the given picture.



GRAMMAR

Q1. Rewrite the following sentences using capital letters, full stop(.), question mark (?) and exclamation mark (!) correctly.

1. What a beautiful dress
2. Mother is making lunch

Q2. Rearrange the jumbled words to form meaningful sentences.

1. the/nest/where/is
2. this/is/who/boy

Q3. Underline the nouns in the following sentences.

1. Joy loves playing football.
2. This is a new car.

Q4. Read the following sentences and write the naming words for the following.

1. A person who repairs electrical things _____.
2. A person who sell us things _____.

Q5. Complete the sentences given below by filling the opposite gender of the highlighted nouns.

1. The **boy** and the _____ were taken on a separate bus.
2. The **tiger** and the _____ escaped from the zoo.

Q6. Underline the common nouns and circle the proper nouns in the following sentences.

1. Preeti won the competition.
2. Heidi is my favourite book.



Q1.Solve the following:

$\begin{array}{r} 9579 \\ + 8765 \\ \hline \end{array}$	$\begin{array}{r} 4321 \\ + 9999 \\ \hline \end{array}$	$\begin{array}{r} 9795 \\ + 8969 \\ \hline \end{array}$
$\begin{array}{r} 9699 \\ + 5978 \\ \hline \end{array}$	$\begin{array}{r} 6929 \\ + 9897 \\ \hline \end{array}$	$\begin{array}{r} 3994 \\ + 9329 \\ \hline \end{array}$
$\begin{array}{r} 9795 \\ + 6939 \\ \hline \end{array}$	$\begin{array}{r} 5969 \\ + 9584 \\ \hline \end{array}$	$\begin{array}{r} 4929 \\ + 9591 \\ \hline \end{array}$
$\begin{array}{r} 6499 \\ + 2978 \\ \hline \end{array}$	$\begin{array}{r} 9754 \\ + 5979 \\ \hline \end{array}$	$\begin{array}{r} 6978 \\ + 9499 \\ \hline \end{array}$
$\begin{array}{r} 4958 \\ + 9593 \\ \hline \end{array}$	$\begin{array}{r} 9993 \\ + 5779 \\ \hline \end{array}$	$\begin{array}{r} 9699 \\ + 3958 \\ \hline \end{array}$



Q2. Compare the following numbers using $>$, $<$, $=$:

1,668 ___ 1,717	5,971 ___ 9,237
3,699 ___ 2,942	4,966 ___ 3,252
5,669 ___ 5,128	4,146 ___ 8,202
6,721 ___ 1,034	7,980 ___ 9,187
2,722 ___ 6,629	9,770 ___ 6,378
9,621 ___ 9,084	8,243 ___ 1,355
3,084 ___ 3,663	2,913 ___ 9,089



Q3. Addition and Subtraction crossword:


Workout the answers to the given sums in the notebook and then put them in the crossword given below:

CROSS

- 1) $7443 - 873 =$ _____
- 2) $2885 + 3958 =$ _____
- 3) $8611 - 6517 =$ _____
- 4) $6004 - 2592 =$ _____
- 5) $2294 + 461 =$ _____

DOWN

- 6) $1007 + 1954 =$ _____
- 7) $4444 + 66 =$ _____
- 8) $8883 - 2578 =$ _____
- 9) $1183 + 7449 =$ _____
- 10) $8864 - 3976 =$ _____



*Learn Tables from 2-15

*Learn counting and Number Names (1-10,000)

*Do Practice of Chapter 2(Numbers) and Chapter 3
(Addition)

ACTIVITY TIME

*Task 1 will be done by the students of Roll
no. 1-23.

*Task 2 will be done by the students of Roll
no. 24-45.

Task 1

- Prepare a hanging with the solid the help of shapes (Cube, Cuboid, Cone, Cylinder etc.) and writes properties of 3d Shapes on A3 size sheet and decorate it.

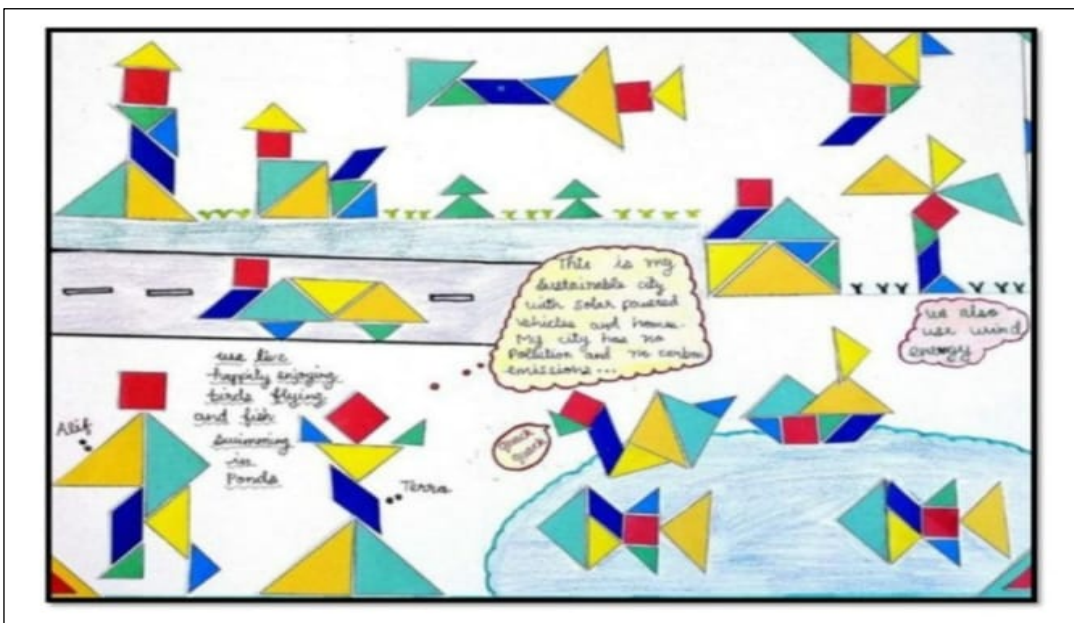


Task 2

Tangram Town :

Design a Sustainable Tangram town poster (on A3Size sheet) integrating Sustainability and Tangram (A tangram is a two dimensional re-arrangement puzzle creating by a square into seven pieces-seven geometric shapes called - “tans”).

Use of tangram to make human figure/birds/animals/buildings/objects(maximum five) to depict the town of 21st century, Sample is shared below for your reference.



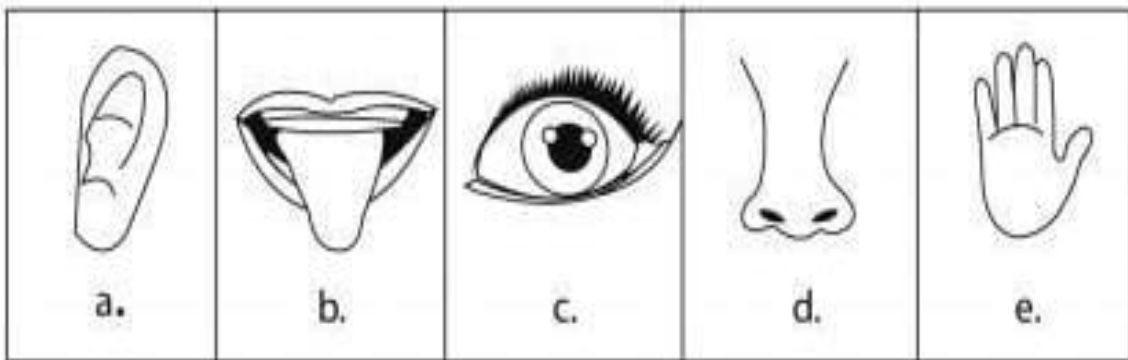
EVS



- Read chapter 1 and 2 thoroughly.
- Learn and revise all the revisions and back exercise of both the chapter.
- Do the given worksheets.


I. Match the pictures with the right words, then fill in the blanks:

- | | |
|------------------------------|--------|
| 1. I can see with my | nose |
| 2. I can smell with my | tongue |
| 3. I can hear with my | eyes |
| 4. I can taste with my | hands |
| 5. I can touch with my | ears |



II. Find the appropriate verb for each sentence:

- | | |
|---|-------|
| 1. I can.....a bird flying up in the sky. | smell |
| 2. I can.....a beautiful song on the radio. | touch |
| 3. I can.....a flower with my nose. | hear |
| 4. I can.....a delicious sandwich. | see |
| 5. I can.....the soft fur of a rabbit. | taste |



III. Check the correct words to complete the sentences below.

1. The ____ is the control center for our body.



brain



heart

2. The ____ pumps blood around the body.



stomach



heart

3. We use our ____ to breathe.



heart



lungs

4. We need our ____ to digest food.



lungs



stomach

Q.V. Answer the following questions in brief.

1) Define Sense organs.

Ans _____
_____.

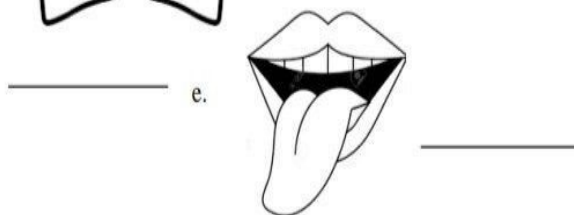
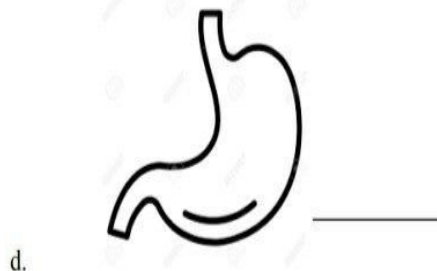
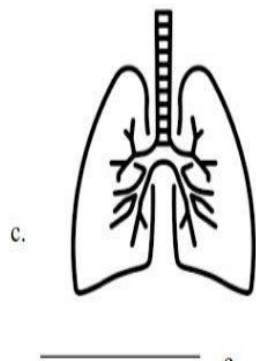
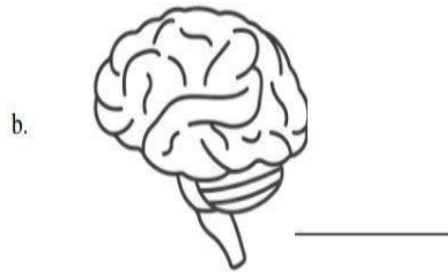

2) What are external Organs?

Ans _____
_____.

Q.VI. Write T for True and F for False statement:

1. Dust and smoke are useful to our lungs. _____
2. There are four types of families. _____
3. Our body is made up of many parts called organs. _____
4. The body parts that are visible from outside the body are called internal organs. _____

Q.VII. Identify the following and name them:



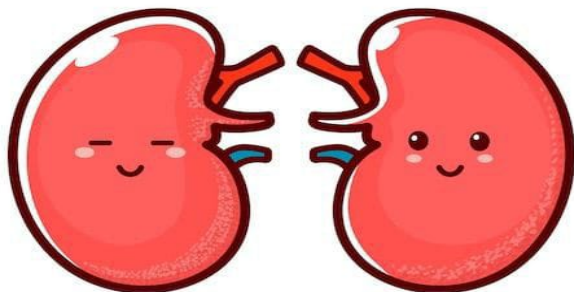
ACTIVITY TIME

- Make a 3-D working model of internal organs. Use your creativity and mind's eye to come up with the best output.

LUNGS (Roll number – 1 to 20)



KIDNEYS (Roll number- 21 to 40)



General knowledge Questions

1. Who was the first woman to become President of India?

Ans: Pratibha Patil

2. When is World Environment Day celebrated?

Ans: 5th June.

3. Which country has no words but has only music in their National Anthem?

Ans: Spain

4. Which planet has Moon as a Satellite? Ans: Earth.

5. What is Kangaroo baby called?

Ans: Joeys

6. Which is the biggest planet in our solar system?

Ans: Jupiter

7. Which is the National Tree of India?

Ans: Banyan Tree.

8. Who was the first President of India?

Ans: Dr. Rajendra Prasad.

9. Who was the first Prime minister of India? Ans: Jawaharlal Nehru.

10. Which is the highest mountain peak in the world?

Ans: Mount Everest.

11. Which is the highest mountain peak in India?

Ans: Kanchenjunga.

12. Which city in Asia got the first electric street light in 1905?

Ans: Bengaluru.

13.Which is the National fruit of India?

Ans: Mango.

14.Which is the biggest part of the brain?

Ans: Cerebrum.

15.Which is the holy river of India?

Ans: Ganga.

16.Who is the author of the famous book My country My Life?

Ans: L.K Advani.

17.Which city is the capital of Andaman and Nicobar?

Ans: Port Blair.

18.Which is the biggest continent in the world?

Ans: Asia

19.Which is the smallest continent in the world?

Ans: Australia.

20.The smallest country in the world is?

Ans: Vatican City.

Art Integrated project

- *Make a Painting/ Sketch on the Traditional Dance Forms of Andaman and Nicobar islands. (Roll no-1-25)*
- *Prepare a Collage/mosaic showing Biodiversity richness of Andaman and Nicobar group of Islands. (Roll no-26-45)*

(Note- kindly make one project according to your roll number.)

